

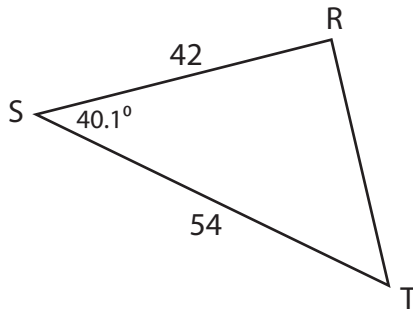
Name : _____

Unknown Angles

L2S1

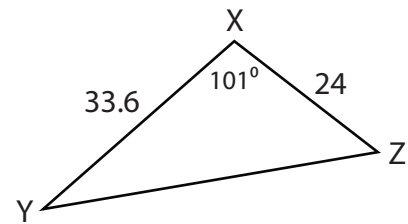
Find the measure of each indicated angle. Round your answer to the nearest tenth.

1)



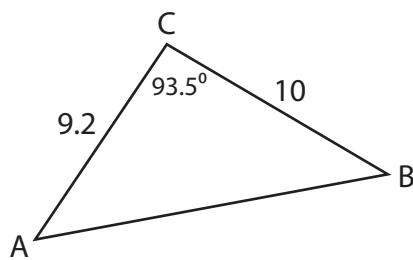
$m\angle T =$ _____

2)



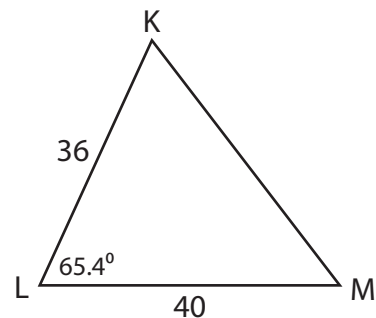
$m\angle Y =$ _____

3)



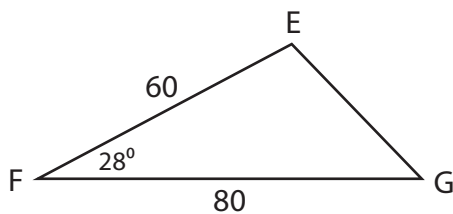
$m\angle A =$ _____

4)



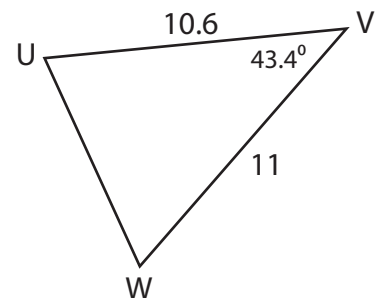
$m\angle K =$ _____

5)



$m\angle E =$ _____

6)



$m\angle U =$ _____

Name : _____

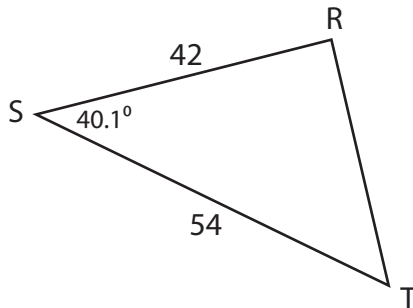
Answer key

Unknown Angles

L2S1

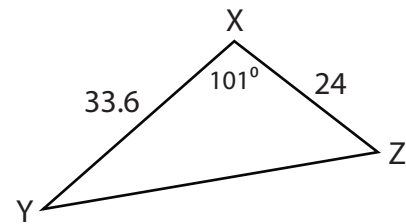
Find the measure of each indicated angle. Round your answer to the nearest tenth.

1)



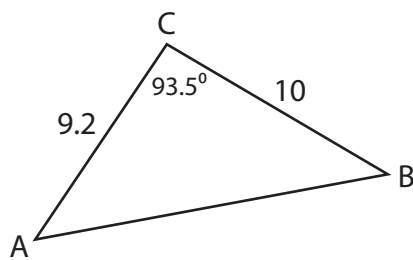
$$m\angle T = \underline{51^\circ}$$

2)



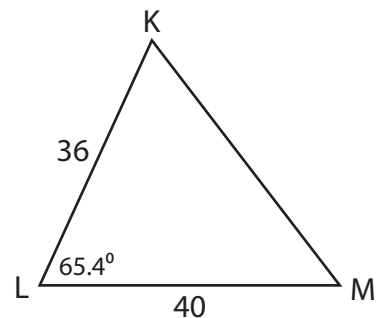
$$m\angle Y = \underline{31.6^\circ}$$

3)



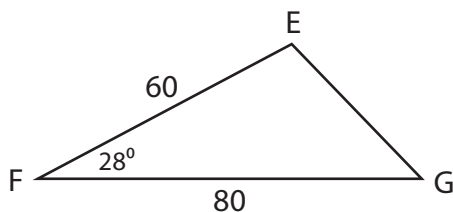
$$m\angle A = \underline{45.5^\circ}$$

4)



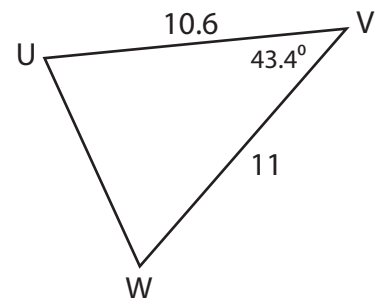
$$m\angle K = \underline{62^\circ}$$

5)



$$m\angle E = \underline{105.9^\circ}$$

6)



$$m\angle U = \underline{70.9^\circ}$$