

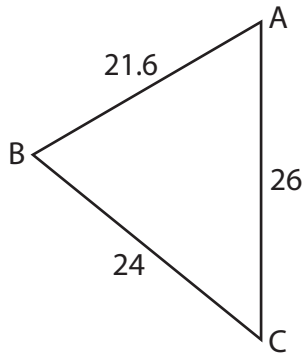
Name : _____

Unknown Angles

L1S1

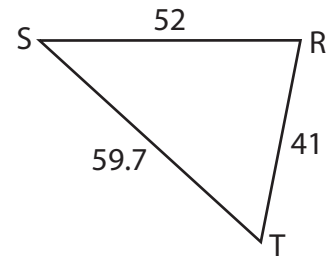
Find the measure of each indicated angle. Round your answer to the nearest tenth.

1)



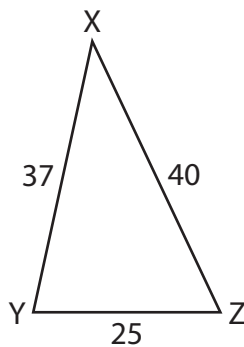
$$m\angle C = \underline{\hspace{2cm}}$$

2)



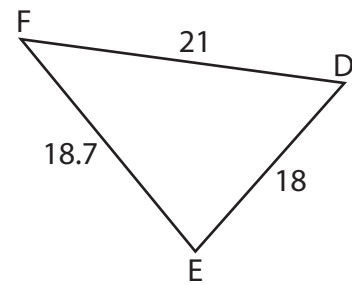
$$m\angle R = \underline{\hspace{2cm}}$$

3)



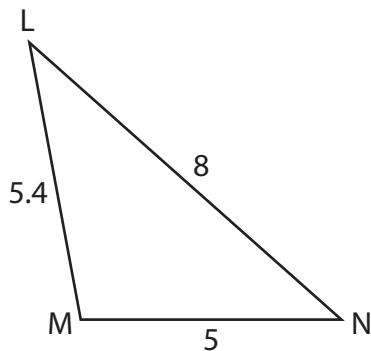
$$m\angle Z = \underline{\hspace{2cm}}$$

4)



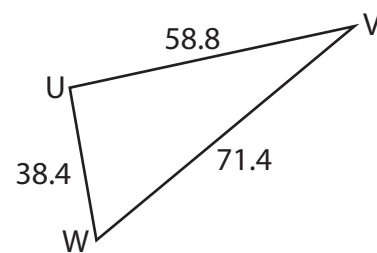
$$m\angle D = \underline{\hspace{2cm}}$$

5)



$$m\angle L = \underline{\hspace{2cm}}$$

6)



$$m\angle U = \underline{\hspace{2cm}}$$

Name : _____

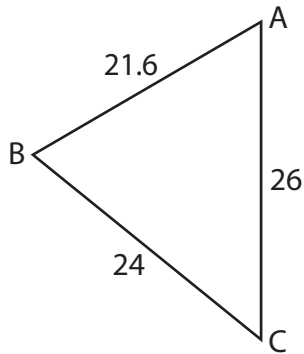
Answer key

Unknown Angles

L1S1

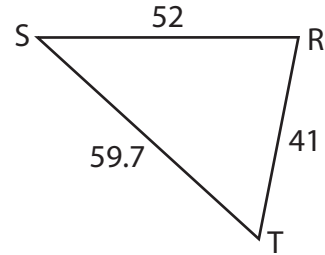
Find the measure of each indicated angle. Round your answer to the nearest tenth.

1)



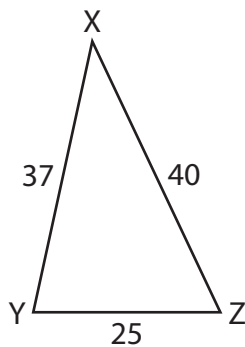
$$m\angle C = \underline{51^\circ}$$

2)



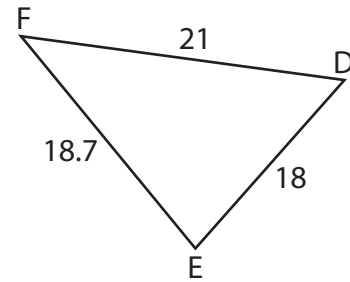
$$m\angle R = \underline{78.9^\circ}$$

3)



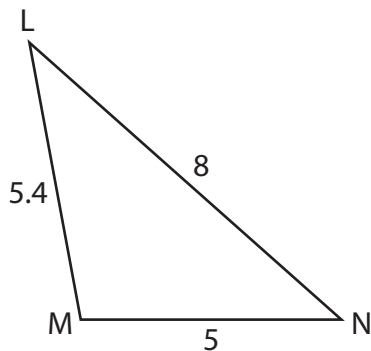
$$m\angle Z = \underline{64.7^\circ}$$

4)



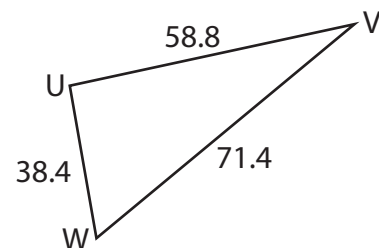
$$m\angle D = \underline{56.7^\circ}$$

5)



$$m\angle L = \underline{37.9^\circ}$$

6)



$$m\angle U = \underline{92.1^\circ}$$