

In Exercises 5–8, rewrite the expression as a trigonometric function of the angle α .

5. $\sin(-\alpha)$ 6. $\cos(-\alpha)$
 7. $\sin(\pi - \alpha)$ 8. $\cos(\pi - \alpha)$

In Exercises 9 and 10, use substitution to find the exact solutions of the system of equations.

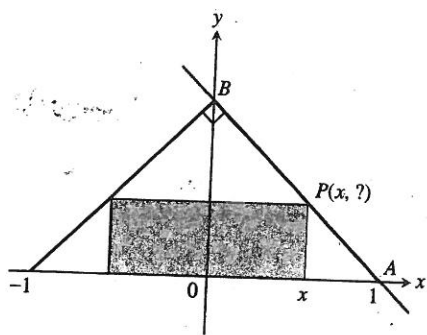
9.
$$\begin{cases} x^2 + y^2 = 4 \\ y = \sqrt{3x} \end{cases}$$

10.
$$\begin{cases} \frac{x^2}{4} + \frac{y^2}{9} = 1 \\ y = x + 3 \end{cases}$$

Section 5.4 Exercises

In Exercises 1–10, solve the problem analytically. Support your answer graphically.

- Finding Numbers** The sum of two nonnegative numbers is 20. Find the numbers if
 - the sum of their squares is as large as possible; as small as possible.
 - one number plus the square root of the other is as large as possible; as small as possible.
- Maximizing Area** What is the largest possible area for a right triangle whose hypotenuse is 5 cm long, and what are its dimensions?
- Minimizing Perimeter** What is the smallest perimeter possible for a rectangle whose area is 16 in^2 , and what are its dimensions?
- Finding Area** Show that among all rectangles with an 8-m perimeter, the one with largest area is a square.
- Inscribing Rectangles** The figure shows a rectangle inscribed in an isosceles right triangle whose hypotenuse is 2 units long.



- Express the y -coordinate of P in terms of x . (*Hint:* Write an equation for the line AB .)
 - Express the area of the rectangle in terms of x .
 - What is the largest area the rectangle can have, and what are its dimensions?
6. **Largest Rectangle** A rectangle has its base on the x -axis and its upper two vertices on the parabola $y = 12 - x^2$. What is the largest area the rectangle can have, and what are its dimensions?

- Optimal Dimensions** You are planning to make an open rectangular box from an 8- by 15-in. piece of cardboard by cutting congruent squares from the corners and folding up the sides. What are the dimensions of the box of largest volume you can make this way, and what is its volume?

- Closing Off the First Quadrant** You are planning to close off a corner of the first quadrant with a line segment 20 units long running from $(a, 0)$ to $(0, b)$. Show that the area of the triangle enclosed by the segment is largest when $a = b$.

- The Best Fencing Plan** A rectangular plot of farmland will be bounded on one side by a river and on the other three sides by a single-strand electric fence. With 800 m of wire at your disposal, what is the largest area you can enclose, and what are its dimensions?

- The Shortest Fence** A 216-m^2 rectangular pea patch is to be enclosed by a fence and divided into two equal parts by another fence parallel to one of the sides. What dimensions for the outer rectangle will require the smallest total length of fence? How much fence will be needed?

- Designing a Tank** Your iron works has contracted to design and build a 500-ft^3 , square-based, open-top, rectangular steel holding tank for a paper company. The tank is to be made by welding thin stainless steel plates together along their edges. As the production engineer, your job is to find dimensions for the base and height that will make the tank weigh as little as possible.

(a) What dimensions do you tell the shop to use?

(b) **Writing to Learn** Briefly describe how you took weight into account.

- Catching Rainwater** A 1125-ft^3 open-top rectangular tank with a square base x ft on a side and y ft deep is to be built with its top flush with the ground to catch runoff water. The costs associated with the tank involve not only the material from which the tank is made but also an excavation charge proportional to the product xy .

(a) If the total cost is

$$c = 5(x^2 + 4xy) + 10xy,$$

what values of x and y will minimize it?

(b) **Writing to Learn** Give a possible scenario for the cost function in (a).

13. Designing a Poster You are designing a rectangular poster to contain 50 in^2 of printing with a 4-in. margin at the top and bottom and a 2-in. margin at each side. What overall dimensions will minimize the amount of paper used?

14. Vertical Motion The height of an object moving vertically is given by

$$s = -16t^2 + 96t + 112,$$

with s in ft and t in sec. Find (a) the object's velocity when $t = 0$, (b) its maximum height and when it occurs, and (c) its velocity when $s = 0$.

15. Finding an Angle Two sides of a triangle have lengths a and b , and the angle between them is θ . What value of θ will maximize the triangle's area? [Hint: $A = (1/2) ab \sin \theta$.]

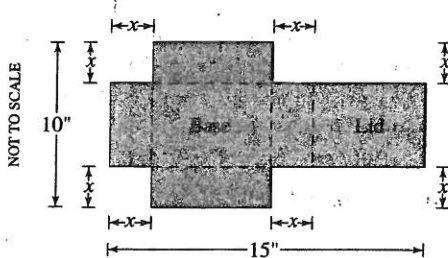
16. Designing a Can What are the dimensions of the lightest open-top right circular cylindrical can that will hold a volume of 1000 cm^3 ? Compare the result here with the result in Example 4.

17. Designing a Can You are designing a 1000-cm^3 right circular cylindrical can whose manufacture will take waste into account. There is no waste in cutting the aluminum for the side, but the top and bottom of radius r will be cut from squares that measure $2r$ units on a side. The total amount of aluminum used up by the can will therefore be

$$A = 8r^2 + 2\pi rh$$

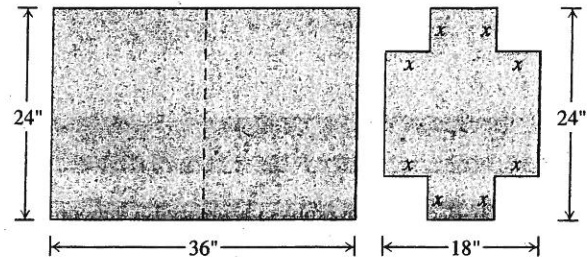
rather than the $A = 2\pi r^2 + 2\pi rh$ in Example 4. In Example 4 the ratio of h to r for the most economical can was 2 to 1. What is the ratio now?

18. Designing a Box with Lid A piece of cardboard measures 10 in. by 15 in. Two equal squares are removed from the corners of a 10-in. side as shown in the figure. Two equal rectangles are removed from the other corners so that the tabs can be folded to form a rectangular box with lid.

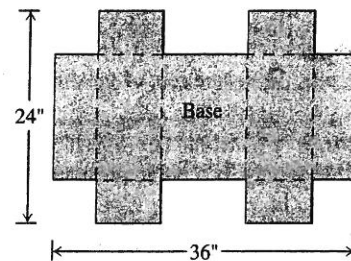


- Write a formula $V(x)$ for the volume of the box.
- Find the domain of V for the problem situation and graph V over this domain.
- Use a graphical method to find the maximum volume and the value of x that gives it.
- Confirm your result in part (c) analytically.

19. Designing a Suitcase A 24- by 36-in. sheet of cardboard is folded in half to form a 24- by 18-in. rectangle as shown in the figure. Then four congruent squares of side length x are cut from the corners of the folded rectangle. The sheet is unfolded, and the six tabs are folded up to form a box with sides and a lid.



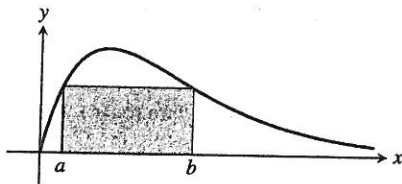
The sheet is then unfolded.



- Write a formula $V(x)$ for the volume of the box.
 - Find the domain of V for the problem situation and graph V over this domain.
 - Use an analytic method to find the maximum volume and the value of x that gives it.
 - Support your result in part (c) graphically.
 - Find a value of x that yields a volume of 1120 in^3 .
 - Writing to Learn** Write a paragraph describing the issues that arise in part (b).
- 20. Quickest Route** Jane is 2 mi offshore in a boat and wishes to reach a coastal village 6 mi down a straight shoreline from the point nearest the boat. She can row 2 mph and can walk 5 mph. Where should she land her boat to reach the village in the least amount of time?
- 21. Inscribing Rectangles** A rectangle is to be inscribed under the arch of the curve $y = 4 \cos(0.5x)$ from $x = -\pi$ to $x = \pi$. What are the dimensions of the rectangle with largest area, and what is the largest area?
- 22. Maximizing Volume** Find the dimensions of a right circular cylinder of maximum volume that can be inscribed in a sphere of radius 10 cm. What is the maximum volume?
- 23. Maximizing Profit** Suppose $r(x) = 8\sqrt{x}$ represents revenue and $c(x) = 2x^2$ represents cost, with x measured in thousands of units. Is there a production level that maximizes profit? If so, what is it?

- 24. Maximizing Profit** Suppose $r(x) = x^2/(x^2 + 1)$ represents revenue and $c(x) = (x - 1)^3/3 + 1/3$ represents cost, with x measured in thousands of units. Is there a production level that maximizes profit? If so, what is it?
- 25. Minimizing Average Cost** Suppose $c(x) = x^3 - 10x^2 - 30x$, where x is measured in thousands of units. Is there a production level that minimizes average cost? If so, what is it?
- 26. Minimizing Average Cost** Suppose $c(x) = xe^x - 2x^2$, where x is measured in thousands of units. Is there a production level that minimizes average cost? If so, what is it?
- 27. Tour Service** You operate a tour service that offers the following rates:
- \$200 per person if 50 people (the minimum number to book the tour) go on the tour.
 - For each additional person, up to a maximum of 80 people total, the rate per person is reduced by \$2.
- It costs \$6000 (a fixed cost) plus \$32 per person to conduct the tour. How many people does it take to maximize your profit?

28. Group Activity The figure shows the graph of $f(x) = xe^{-x}$, $x \geq 0$.



- (a) Find where the absolute maximum of f occurs.
- (b) Let $a > 0$ and $b > 0$ be given as shown in the figure. Complete the following table where A is the area of the rectangle in the figure.

a	b	A
0.1		
0.2		
0.3		
⋮		
1		

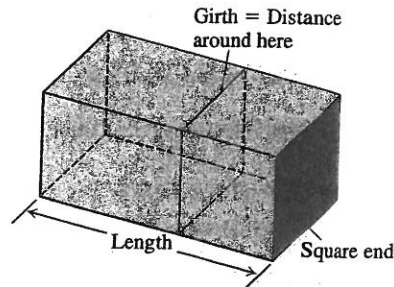
- (c) Draw a scatter plot of the data (a, A) .
- (d) Find the quadratic, cubic, and quartic regression equations for the data in part (b), and superimpose their graphs on a scatter plot of the data.
- (e) Use each of the regression equations in part (d) to estimate the maximum possible value of the area of the rectangle.

29. Cubic Polynomial Functions

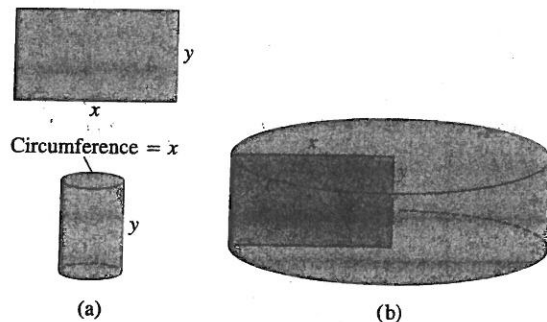
Let $f(x) = ax^3 + bx^2 + cx + d$, $a \neq 0$.

- (a) Show that f has either 0 or 2 local extrema.
- (b) Give an example of each possibility in part (a).

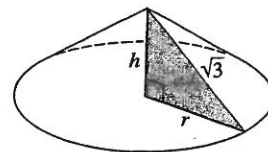
30. Shipping Packages The U.S. Postal Service will accept a box for domestic shipment only if the sum of its length and girth (distance around), as shown in the figure, does not exceed 108 in. What dimensions will give a box with a square end the largest possible volume?



- 31. Constructing Cylinders** Compare the answers to the following two construction problems.
- (a) A rectangular sheet of perimeter 36 cm and dimensions x cm by y cm is to be rolled into a cylinder as shown in part (a) of the figure. What values of x and y give the largest volume?
- (b) The same sheet is to be revolved about one of the sides of length y to sweep out the cylinder as shown in part (b) of the figure. What values of x and y give the largest volume?




32. Constructing Cones A right triangle whose hypotenuse is $\sqrt{3}$ m long is revolved about one of its legs to generate a right circular cone. Find the radius, height, and volume of the cone of greatest volume that can be made this way.

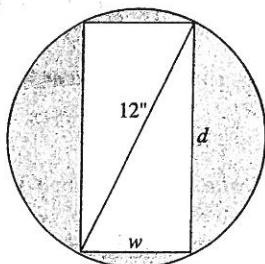


33. Finding Parameter Values What value of a makes $f(x) = x^2 + (a/x)$ have (a) a local minimum at $x = 2$? (b) a point of inflection at $x = 1$?

- 34. Finding Parameter Values** Show that $f(x) = x^2 + (a/x)$ cannot have a local maximum for any value of a .
- 35. Finding Parameter Values** What values of a and b make $f(x) = x^3 + ax^2 + bx$ have (a) a local maximum at $x = -1$ and a local minimum at $x = 3$? (b) a local minimum at $x = 4$ and a point of inflection at $x = 1$?
- 36. Inscribing a Cone** Find the volume of the largest right circular cone that can be inscribed in a sphere of radius 3.



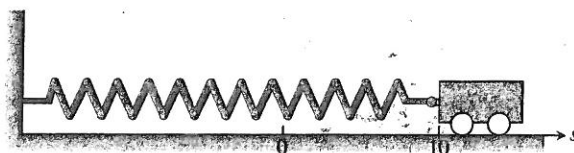
- 37. Strength of a Beam** The strength S of a rectangular wooden beam is proportional to its width times the square of its depth.
- (a) Find the dimensions of the strongest beam that can be cut from a 12-in.-diameter cylindrical log.
- (b) **Writing to Learn** Graph S as a function of the beam's width w , assuming the proportionality constant to be $k = 1$. Reconcile what you see with your answer in part (a).
- (c) **Writing to Learn** On the same screen, graph S as a function of the beam's depth d , again taking $k = 1$. Compare the graphs with one another and with your answer in part (a). What would be the effect of changing to some other value of k ? Try it.



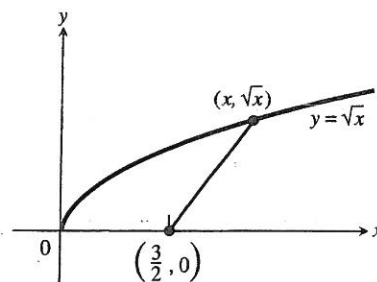
- 38. Stiffness of a Beam** The stiffness S of a rectangular beam is proportional to its width times the cube of its depth.
- (a) Find the dimensions of the stiffest beam that can be cut from a 12-in.-diameter cylindrical log.
- (b) **Writing to Learn** Graph S as a function of the beam's width w , assuming the proportionality constant to be $k = 1$. Reconcile what you see with your answer in part (a).

- (c) **Writing to Learn** On the same screen, graph S as a function of the beam's depth d , again taking $k = 1$. Compare the graphs with one another and with your answer in part (a). What would be the effect of changing to some other value of k ? Try it.

- 39. Frictionless Cart** A small frictionless cart, attached to the wall by a spring, is pulled 10 cm from its rest position and released at time $t = 0$ to roll back and forth for 4 sec. Its position at time t is $s = 10 \cos \pi t$.
- (a) What is the cart's maximum speed? When is the cart moving that fast? Where is it then? What is the magnitude of the acceleration then?
- (b) Where is the cart when the magnitude of the acceleration is greatest? What is the cart's speed then?

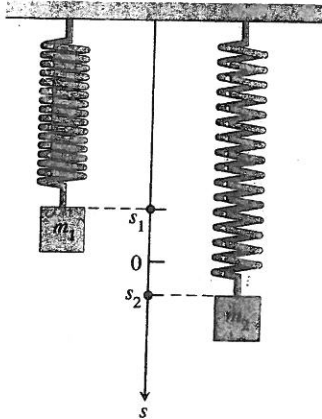


- 40. Electrical Current** Suppose that at any time t (sec) the current i (amp) in an alternating current circuit is $i = 2 \cos t + 2 \sin t$. What is the peak (largest magnitude) current for this circuit?
- 41. Calculus and Geometry** How close does the curve $y = \sqrt{x}$ come to the point $(3/2, 0)$? (Hint: If you minimize the square of the distance, you can avoid square roots.)

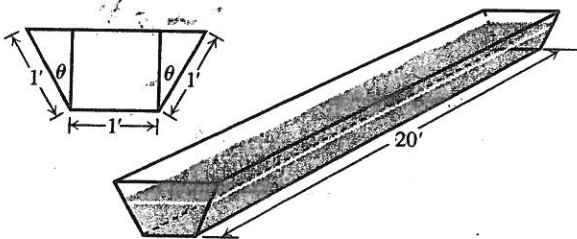


- 42. Calculus and Geometry** How close does the semicircle $y = \sqrt{16 - x^2}$ come to the point $(1, \sqrt{3})$?
- 43. Writing to Learn** Is the function $f(x) = x^2 - x + 1$ ever negative? Explain.
- 44. Writing to Learn** You have been asked to determine whether the function $f(x) = 3 + 4 \cos x + \cos 2x$ is ever negative.
- (a) Explain why you need to consider values of x only in the interval $[0, 2\pi]$.
- (b) Is f ever negative? Explain.

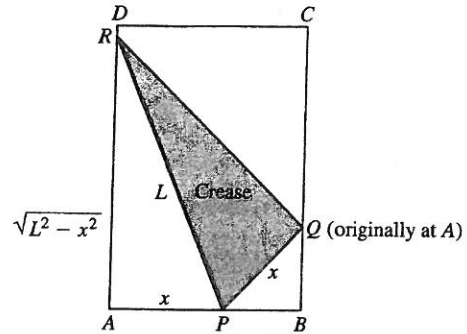
- 45. Vertical Motion** Two masses hanging side by side from springs have positions $s_1 = 2 \sin t$ and $s_2 = \sin 2t$, respectively, with s_1 and s_2 in meters and t in seconds.



- (a) At what times in the interval $t > 0$ do the masses pass each other? (*Hint: $\sin 2t = 2 \sin t \cos t$.*)
- (b) When in the interval $0 \leq t \leq 2\pi$ is the vertical distance between the masses the greatest? What is this distance? (*Hint: $\cos 2t = 2 \cos^2 t - 1$.*)
- 46. Motion on a Line** The positions of two particles on the s -axis are $s_1 = \sin t$ and $s_2 = \sin(t + \pi/3)$, with s_1 and s_2 in meters and t in seconds.
- (a) At what time(s) in the interval $0 \leq t \leq 2\pi$ do the particles meet?
- (b) What is the farthest apart that the particles ever get?
- (c) When in the interval $0 \leq t \leq 2\pi$ is the distance between the particles changing the fastest?
- 47. Finding an Angle** The trough in the figure is to be made to the dimensions shown. Only the angle θ can be varied. What value of θ will maximize the trough's volume?



- 48. Group Activity Paper Folding** A rectangular sheet of $8 \frac{1}{2}$ -by-11-in. paper is placed on a flat surface. One of the corners is placed on the opposite longer edge, as shown in the figure, and held there as the paper is smoothed flat. The problem is to make the length of the crease as small as possible. Call the length L . Try it with paper.
- (a) Show that $L^2 = 2x^3/(2x - 8.5)$.
- (b) What value of x minimizes L^2 ?
- (c) What is the minimum value of L ?



- 49. Sensitivity to Medicine** (continuation of Exercise 48, Section 3.3) Find the amount of medicine to which the body is most sensitive by finding the value of M that maximizes the derivative dR/dM .
- 50. Selling Backpacks** It costs you c dollars each to manufacture and distribute backpacks. If the backpacks sell at x dollars each, the number sold is given by
- $$n = \frac{a}{x - c} + b(100 - x),$$
- where a and b are certain positive constants. What selling price will bring a maximum profit?

Standardized Test Questions

You may use a graphing calculator to solve the following problems.

- 51. True or False** A continuous function on a closed interval must attain a maximum value on that interval. Justify your answer.
- 52. True or False** If $f'(c) = 0$ and $f(c)$ is not a local maximum, then $f(c)$ is a local minimum. Justify your answer.
- 53. Multiple Choice** Two positive numbers have a sum of 60. What is the maximum product of one number times the square of the second number?
- (A) 3481 (B) 3600 (C) 27,000
(D) 32,000 (E) 36,000
- 54. Multiple Choice** A continuous function f has domain $[1, 25]$ and range $[3, 30]$. If $f'(x) < 0$ for all x between 1 and 25, what is $f(25)$?
- (A) 1 (B) 3 (C) 25 (D) 30
(E) impossible to determine from the information given
- 55. Multiple Choice** What is the maximum area of a right triangle with hypotenuse 10?
- (A) 24 (B) 25 (C) $25\sqrt{2}$
(D) 48 (E) 50