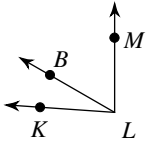
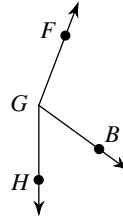


The Angle Addition Postulate

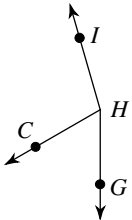
- 1) Find $m\angle KLM$ if $m\angle KLB = 26^\circ$
and $m\angle BLM = 60^\circ$.



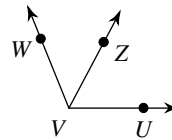
- 2) Find $m\angle FGH$ if $m\angle FGB = 105^\circ$
and $m\angle BGH = 54^\circ$.



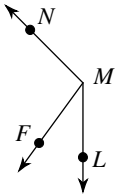
- 3) $m\angle GHC = 60^\circ$ and $m\angle CHI = 104^\circ$.
Find $m\angle GHI$.



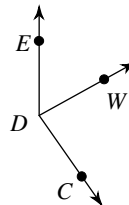
- 4) Find $m\angle WVU$ if $m\angle ZVU = 62^\circ$
and $m\angle WVZ = 50^\circ$.



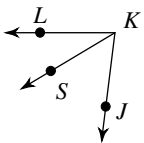
- 5) $m\angle FMN = 99^\circ$ and $m\angle LMF = 36^\circ$.
Find $m\angle LMN$.



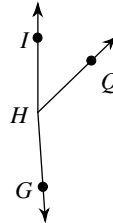
- 6) Find $m\angle WDC$ if $m\angle EDC = 145^\circ$
and $m\angle EDW = 61^\circ$.



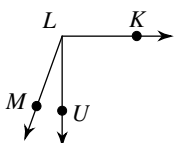
- 7) Find $m\angle JKL$ if $m\angle SKL = 31^\circ$
and $m\angle JKS = 52^\circ$.



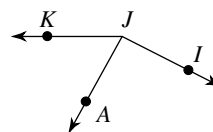
- 8) Find $m\angle IHQ$ if $m\angle IHG = 176^\circ$
and $m\angle QHG = 130^\circ$.



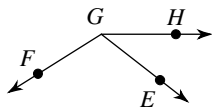
- 9) Find $m\angle KLU$ if $m\angle ULM = 20^\circ$
and $m\angle KLM = 110^\circ$.



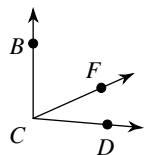
- 10) Find $m\angle IJA$ if $m\angle AJK = 61^\circ$
and $m\angle IJK = 153^\circ$.



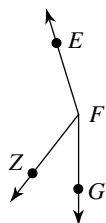
- 11) $m\angle HGF = 16x + 4$, $m\angle EGF = 110^\circ$,
and $m\angle HGE = 3x + 11$. Find x .



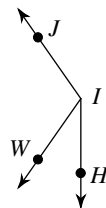
- 13) $m\angle FCD = x + 41$, $m\angle BCF = x + 78$,
and $m\angle BCD = 95^\circ$. Find x .



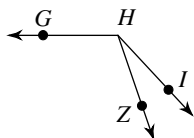
- 15) $m\angle GFZ = 38^\circ$, $m\angle ZFE = 2x + 125$,
and $m\angle GFE = x + 163$. Find x .



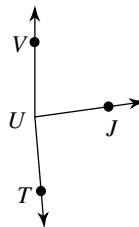
- 17) Find $m\angle HIW$ if $m\angle WIJ = 10x$,
 $m\angle HIJ = 145^\circ$, and $m\angle HIW = 2x + 13$.



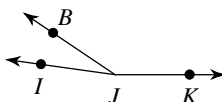
- 19) $m\angle ZHG = 11x - 1$, $m\angle IHZ = 24^\circ$,
and $m\angle IHG = 12x + 13$. Find $m\angle IHG$.



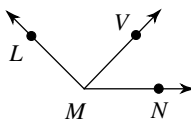
- 12) $m\angle VUT = 175^\circ$, $m\angle VUJ = 17x - 3$,
and $m\angle JUT = 17x + 8$. Find x .



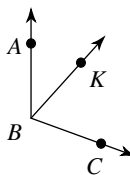
- 14) Find x if $m\angle BJK = 146 + 2x$,
 $m\angle IJK = 172^\circ$, and $m\angle IJB = 2x + 26$.



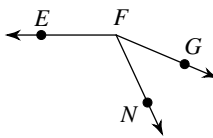
- 16) Find x if $m\angle LMN = 135^\circ$,
 $m\angle LMV = -1 + 45x$, and $m\angle VMN = 23x$.



- 18) $m\angle ABC = 17x + 8$, $m\angle ABK = 42^\circ$,
and $m\angle KBC = 12x - 4$. Find $m\angle ABC$.

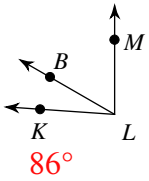


- 20) $m\angle GFN = 4x + 10$, $m\angle NFE = 14x + 3$,
and $m\angle GFE = 157^\circ$. Find $m\angle NFE$.

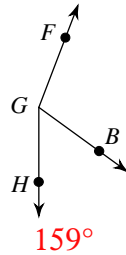


The Angle Addition Postulate

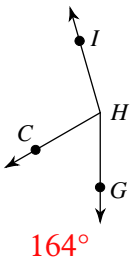
- 1) Find $m\angle KLM$ if $m\angle KLB = 26^\circ$ and $m\angle BLM = 60^\circ$.



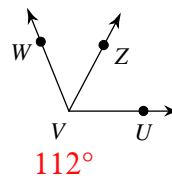
- 2) Find $m\angle FGH$ if $m\angle FGB = 105^\circ$ and $m\angle BGH = 54^\circ$.



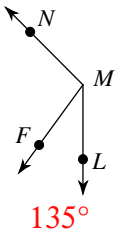
- 3) $m\angle GHC = 60^\circ$ and $m\angle CHI = 104^\circ$. Find $m\angle GHI$.



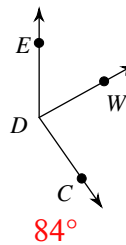
- 4) Find $m\angle WVU$ if $m\angle ZVU = 62^\circ$ and $m\angle WVZ = 50^\circ$.



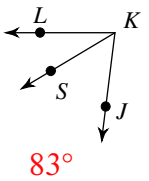
- 5) $m\angle FMN = 99^\circ$ and $m\angle LMF = 36^\circ$. Find $m\angle LMN$.



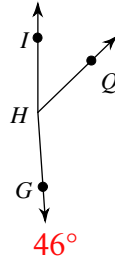
- 6) Find $m\angle WDC$ if $m\angle EDC = 145^\circ$ and $m\angle EDW = 61^\circ$.



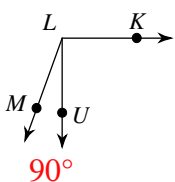
- 7) Find $m\angle JKL$ if $m\angle SKL = 31^\circ$ and $m\angle JKS = 52^\circ$.



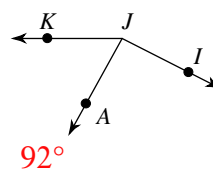
- 8) Find $m\angle IHQ$ if $m\angle IHG = 176^\circ$ and $m\angle QHG = 130^\circ$.



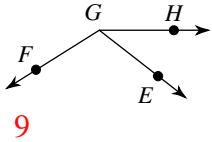
- 9) Find $m\angle KLU$ if $m\angle ULM = 20^\circ$ and $m\angle KLM = 110^\circ$.



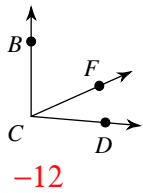
- 10) Find $m\angle IJA$ if $m\angle AJK = 61^\circ$ and $m\angle IJK = 153^\circ$.



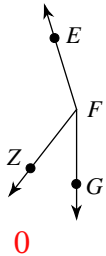
- 11) $m\angle HGF = 16x + 4$, $m\angle EGF = 110^\circ$,
and $m\angle HGE = 3x + 11$. Find x .



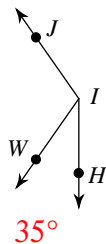
- 13) $m\angle FCD = x + 41$, $m\angle BCF = x + 78$,
and $m\angle BCD = 95^\circ$. Find x .



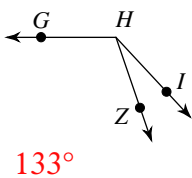
- 15) $m\angle GFZ = 38^\circ$, $m\angle ZFE = 2x + 125$,
and $m\angle GFE = x + 163$. Find x .



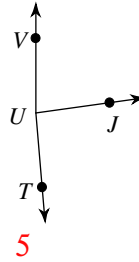
- 17) Find $m\angle HIW$ if $m\angle WIJ = 10x$,
 $m\angle HIJ = 145^\circ$, and $m\angle HIW = 2x + 13$.



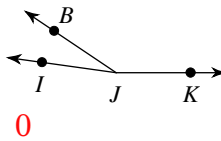
- 19) $m\angle ZHG = 11x - 1$, $m\angle IHZ = 24^\circ$,
and $m\angle IHG = 12x + 13$. Find $m\angle IHG$.



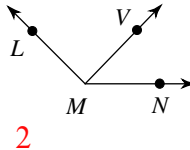
- 12) $m\angle VUT = 175^\circ$, $m\angle VUJ = 17x - 3$,
and $m\angle JUT = 17x + 8$. Find x .



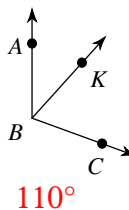
- 14) Find x if $m\angle BJK = 146 + 2x$,
 $m\angle IJK = 172^\circ$, and $m\angle IJB = 2x + 26$.



- 16) Find x if $m\angle LMN = 135^\circ$,
 $m\angle LMV = -1 + 45x$, and $m\angle VMN = 23x$.



- 18) $m\angle ABC = 17x + 8$, $m\angle ABK = 42^\circ$,
and $m\angle KBC = 12x - 4$. Find $m\angle ABC$.



- 20) $m\angle GFN = 4x + 10$, $m\angle NFE = 14x + 3$,
and $m\angle GFE = 157^\circ$. Find $m\angle NFE$.

